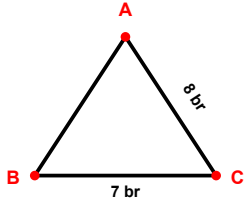
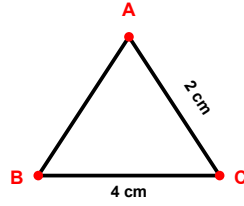


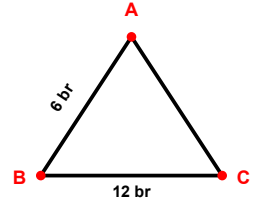
SORU: Aşağıdaki şekillerde verilen kenar uzunluklarının toplamını bulunuz.



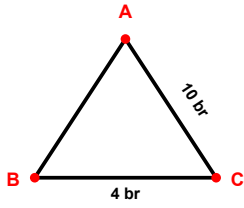
$$|BC| + |CA| = \dots$$



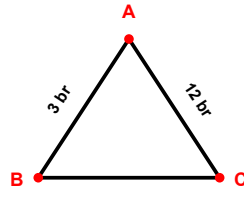
$$|CA| + |BC| = \dots$$



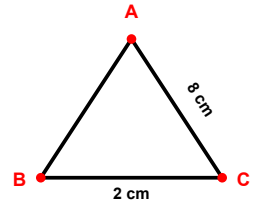
$$|BC| + |AB| = \dots$$



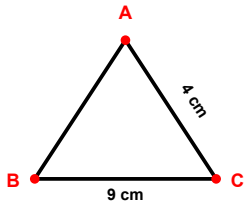
$$|BC| + |CA| = \dots$$



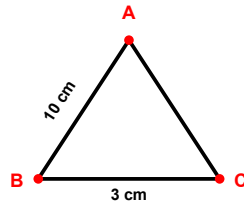
$$|CA| + |AB| = \dots$$



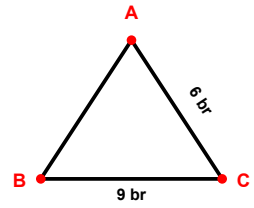
$$|CA| + |BC| = \dots$$



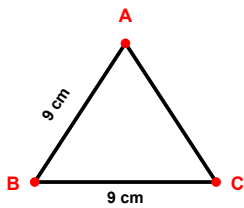
$$|BC| + |CA| = \dots$$



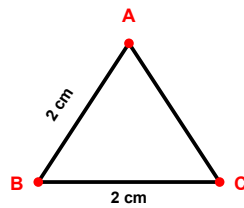
$$|BC| + |AB| = \dots$$



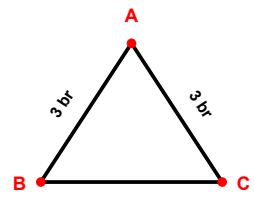
$$|CA| + |BC| = \dots$$



$$|BC| + |AB| = \dots$$

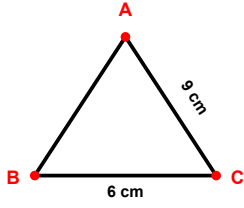


$$|BC| + |AB| = \dots$$

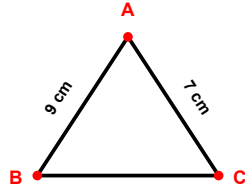


$$|CA| + |AB| = \dots$$

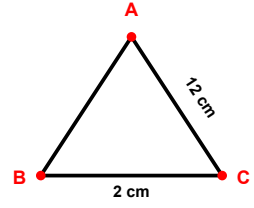
SORU: Aşağıdaki şekillerde verilen kenar uzunluklarının toplamını bulunuz.



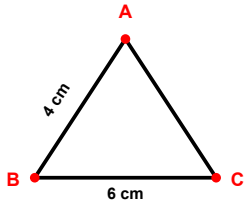
$$|CA| + |BC| = \dots$$



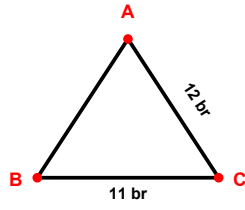
$$|AB| + |CA| = \dots$$



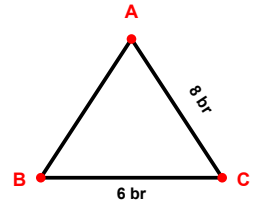
$$|BC| + |CA| = \dots$$



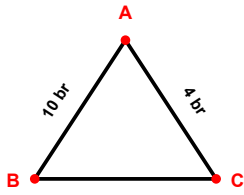
$$|BC| + |AB| = \dots$$



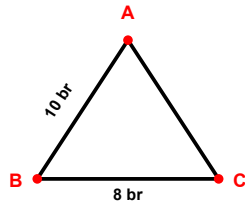
$$|BC| + |CA| = \dots$$



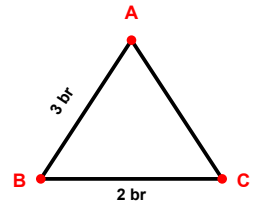
$$|CA| + |BC| = \dots$$



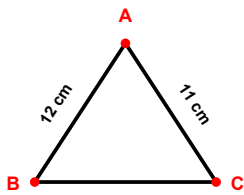
$$|AB| + |CA| = \dots$$



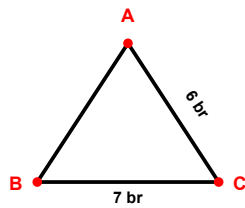
$$|AB| + |BC| = \dots$$



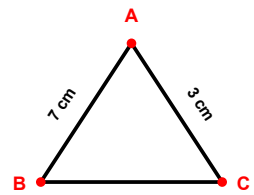
$$|BC| + |AB| = \dots$$



$$|CA| + |AB| = \dots$$

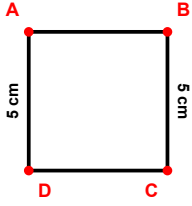


$$|CA| + |BC| = \dots$$

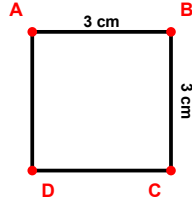


$$|AB| + |CA| = \dots$$

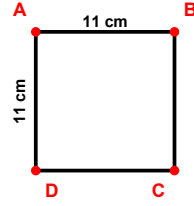
SORU: Aşağıdaki şekillerde verilen kenar uzunluklarının toplamını bulunuz.



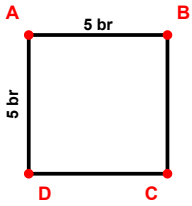
$$|DA| + |BC| = \dots$$



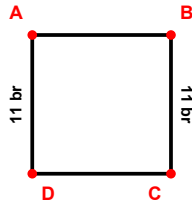
$$|AB| + |BC| = \dots$$



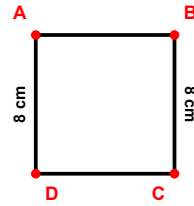
$$|DA| + |AB| = \dots$$



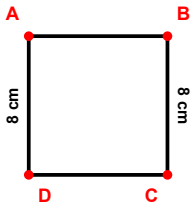
$$|AB| + |DA| = \dots$$



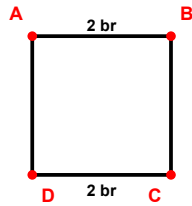
$$|DA| + |BC| = \dots$$



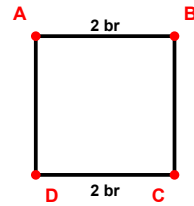
$$|BC| + |DA| = \dots$$



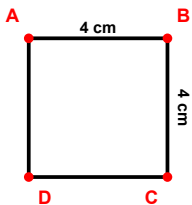
$$|DA| + |BC| = \dots$$



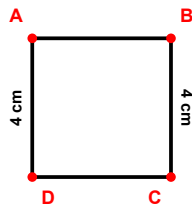
$$|CD| + |AB| = \dots$$



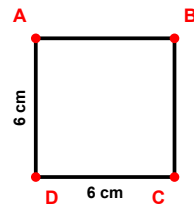
$$|AB| + |CD| = \dots$$



$$|BC| + |AB| = \dots$$

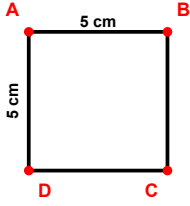


$$|BC| + |DA| = \dots$$

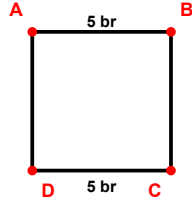


$$|CD| + |DA| = \dots$$

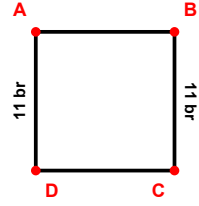
SORU: Aşağıdaki şekillerde verilen kenar uzunluklarının toplamını bulunuz.



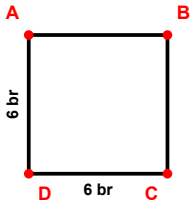
$$|DA| + |AB| = \dots$$



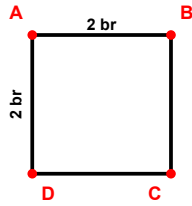
$$|CD| + |AB| = \dots$$



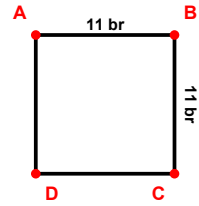
$$|DA| + |BC| = \dots$$



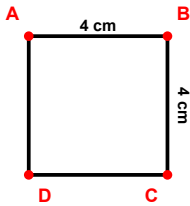
$$|CD| + |DA| = \dots$$



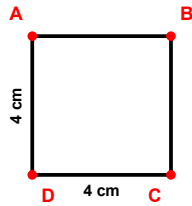
$$|DA| + |AB| = \dots$$



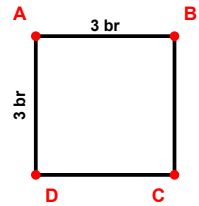
$$|BC| + |AB| = \dots$$



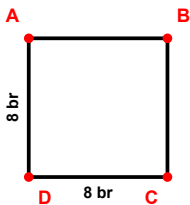
$$|AB| + |BC| = \dots$$



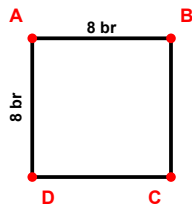
$$|CD| + |DA| = \dots$$



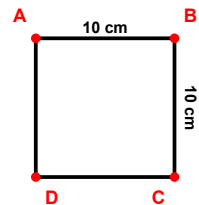
$$|DA| + |AB| = \dots$$



$$|DA| + |CD| = \dots$$

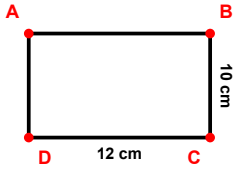


$$|DA| + |AB| = \dots$$

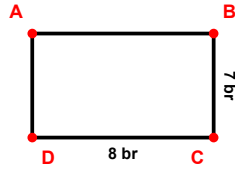


$$|BC| + |AB| = \dots$$

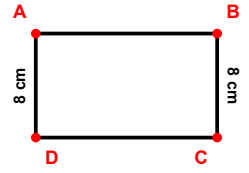
SORU: Aşağıdaki şekillerde verilen kenar uzunluklarının toplamını bulunuz.



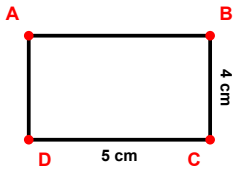
$$|BC| + |CD| = \dots$$



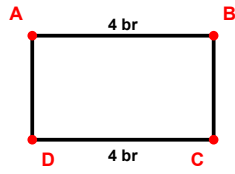
$$|BC| + |CD| = \dots$$



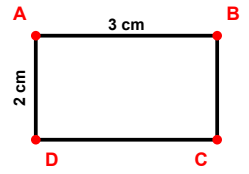
$$|DA| + |BC| = \dots$$



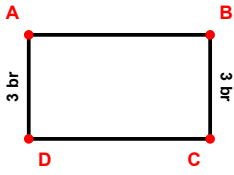
$$|CD| + |BC| = \dots$$



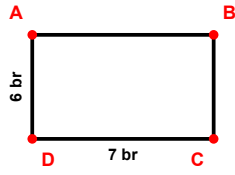
$$|AB| + |CD| = \dots$$



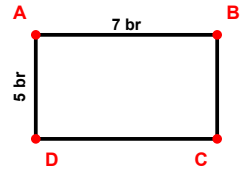
$$|DA| + |AB| = \dots$$



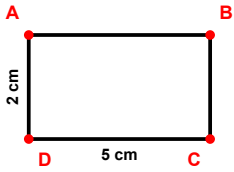
$$|DA| + |BC| = \dots$$



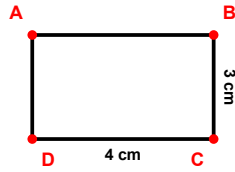
$$|DA| + |CD| = \dots$$



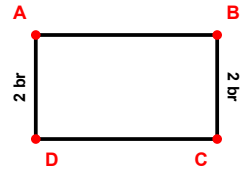
$$|DA| + |AB| = \dots$$



$$|CD| + |DA| = \dots$$

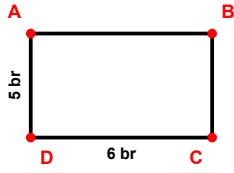


$$|CD| + |BC| = \dots$$

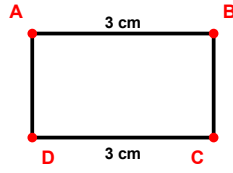


$$|BC| + |DA| = \dots$$

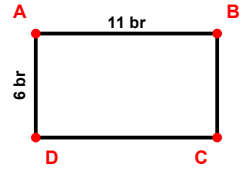
SORU: Aşağıdaki şekillerde verilen kenar uzunluklarının toplamını bulunuz.



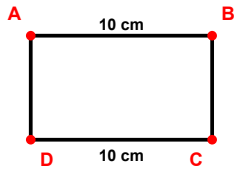
$$|DA| + |CD| = \dots$$



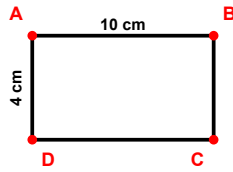
$$|CD| + |AB| = \dots$$



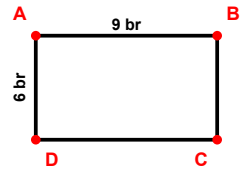
$$|AB| + |DA| = \dots$$



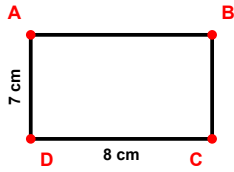
$$|CD| + |AB| = \dots$$



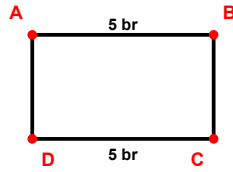
$$|DA| + |AB| = \dots$$



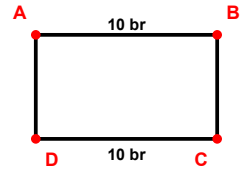
$$|DA| + |AB| = \dots$$



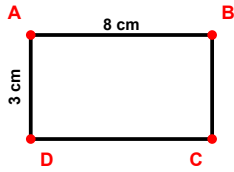
$$|DA| + |CD| = \dots$$



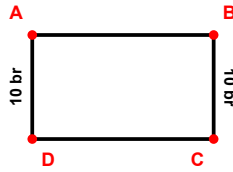
$$|CD| + |AB| = \dots$$



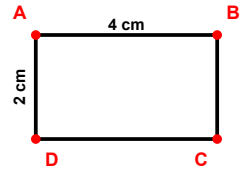
$$|AB| + |CD| = \dots$$



$$|DA| + |AB| = \dots$$

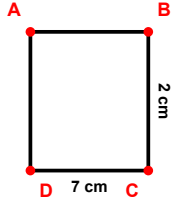


$$|DA| + |BC| = \dots$$

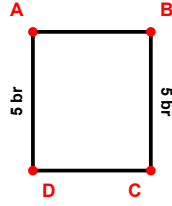


$$|DA| + |AB| = \dots$$

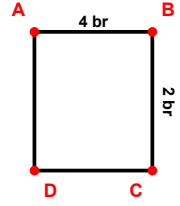
SORU: Aşağıdaki şekillerde verilen kenar uzunluklarının toplamını bulunuz.



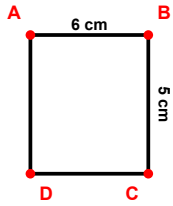
$$|CD| + |BC| = \dots$$



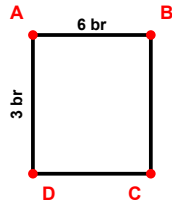
$$|BC| + |DA| = \dots$$



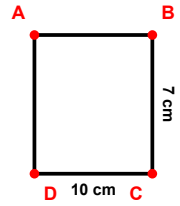
$$|BC| + |AB| = \dots$$



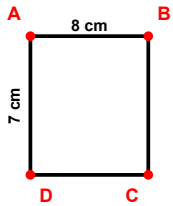
$$|BC| + |AB| = \dots$$



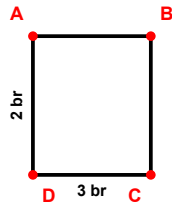
$$|AB| + |DA| = \dots$$



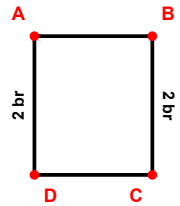
$$|CD| + |BC| = \dots$$



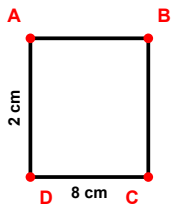
$$|AB| + |DA| = \dots$$



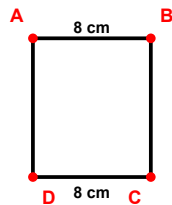
$$|CD| + |DA| = \dots$$



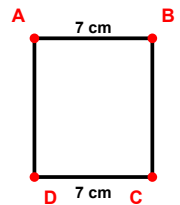
$$|DA| + |BC| = \dots$$



$$|DA| + |CD| = \dots$$

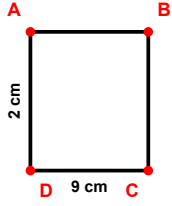


$$|AB| + |CD| = \dots$$

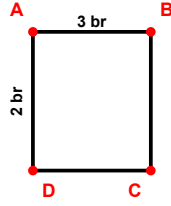


$$|AB| + |CD| = \dots$$

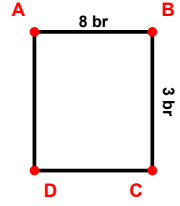
SORU: Aşağıdaki şekillerde verilen kenar uzunluklarının toplamını bulunuz.



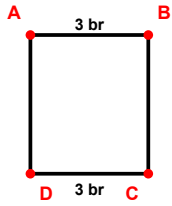
$$|CD| + |DA| = \dots$$



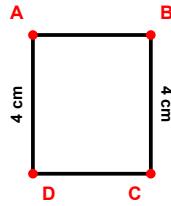
$$|AB| + |DA| = \dots$$



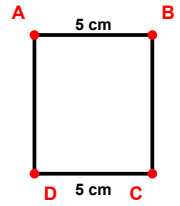
$$|BC| + |AB| = \dots$$



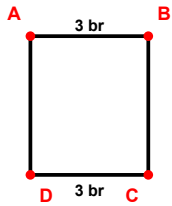
$$|CD| + |AB| = \dots$$



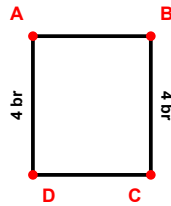
$$|DA| + |BC| = \dots$$



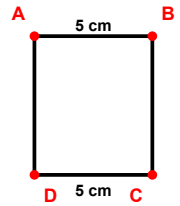
$$|CD| + |AB| = \dots$$



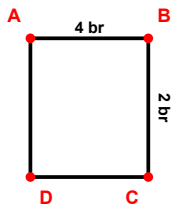
$$|CD| + |AB| = \dots$$



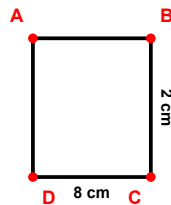
$$|BC| + |DA| = \dots$$



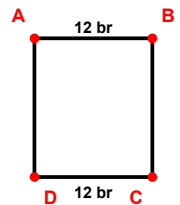
$$|AB| + |CD| = \dots$$



$$|AB| + |BC| = \dots$$

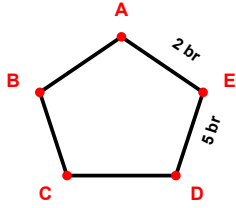


$$|CD| + |BC| = \dots$$

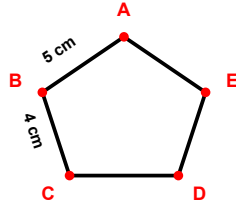


$$|CD| + |AB| = \dots$$

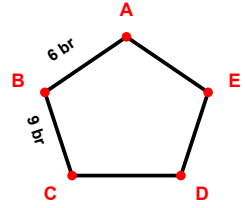
SORU: Aşağıdaki şekillerde verilen kenar uzunluklarının toplamını bulunuz.



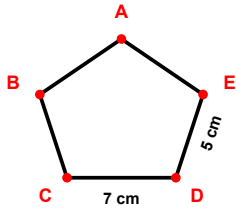
$$|EA| + |DE| = \dots$$



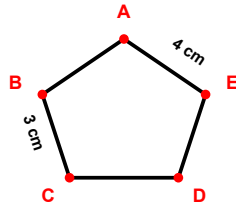
$$|AB| + |BC| = \dots$$



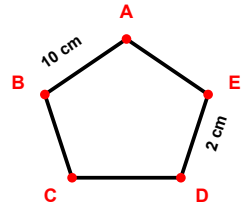
$$|BC| + |AB| = \dots$$



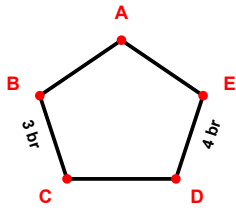
$$|DE| + |CD| = \dots$$



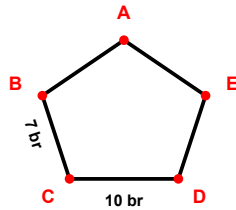
$$|BC| + |EA| = \dots$$



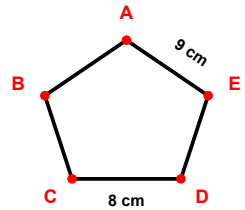
$$|DE| + |AB| = \dots$$



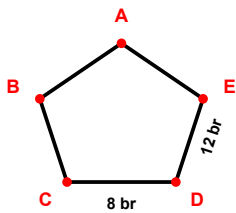
$$|BC| + |DE| = \dots$$



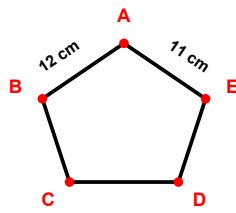
$$|BC| + |CD| = \dots$$



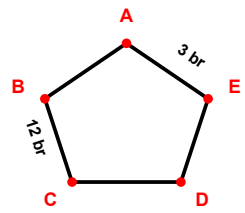
$$|EA| + |CD| = \dots$$



$$|CD| + |DE| = \dots$$

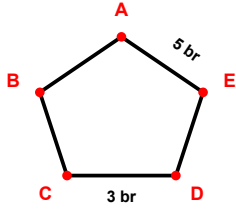


$$|EA| + |AB| = \dots$$

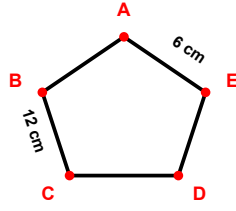


$$|BC| + |EA| = \dots$$

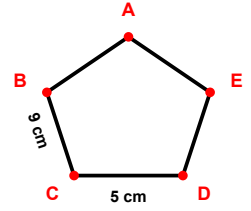
SORU: Aşağıdaki şekillerde verilen kenar uzunluklarının toplamını bulunuz.



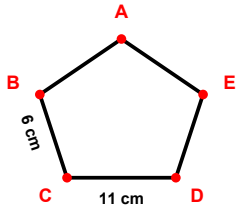
$$|EA| + |CD| = \dots$$



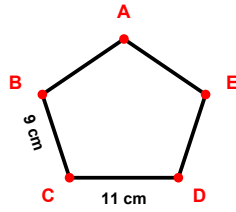
$$|BC| + |EA| = \dots$$



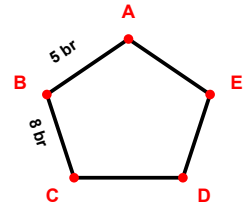
$$|BC| + |CD| = \dots$$



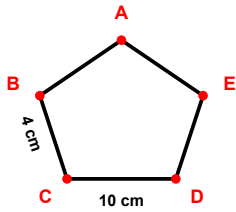
$$|CD| + |BC| = \dots$$



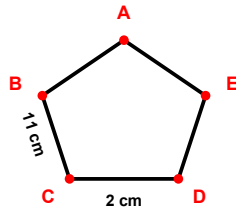
$$|BC| + |CD| = \dots$$



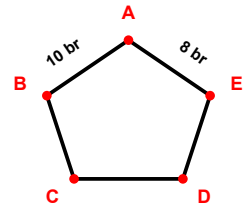
$$|BC| + |AB| = \dots$$



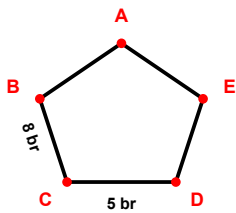
$$|BC| + |CD| = \dots$$



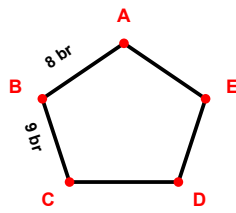
$$|BC| + |CD| = \dots$$



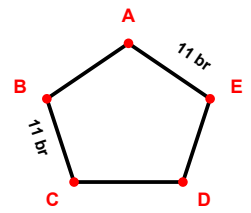
$$|AB| + |EA| = \dots$$



$$|BC| + |CD| = \dots$$

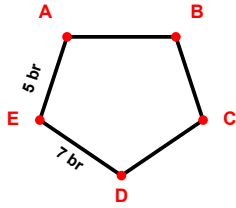


$$|BC| + |AB| = \dots$$

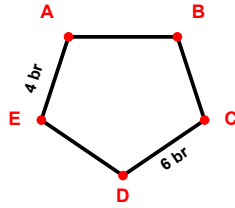


$$|BC| + |EA| = \dots$$

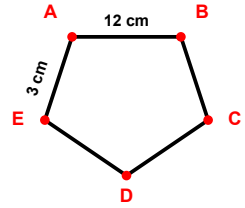
SORU: Aşağıdaki şekillerde verilen kenar uzunluklarının toplamını bulunuz.



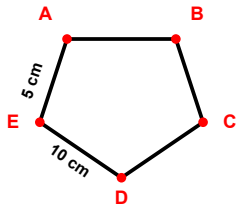
$$|DE| + |EA| = \dots$$



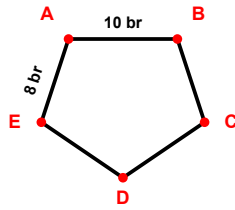
$$|CD| + |EA| = \dots$$



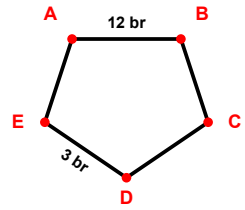
$$|EA| + |AB| = \dots$$



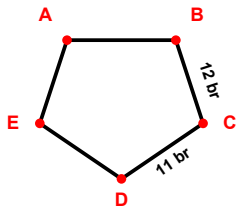
$$|DE| + |EA| = \dots$$



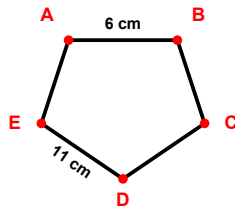
$$|EA| + |AB| = \dots$$



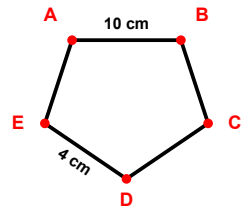
$$|AB| + |DE| = \dots$$



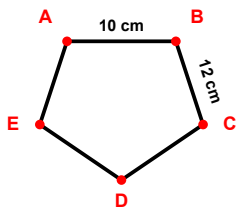
$$|CD| + |BC| = \dots$$



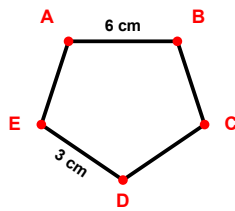
$$|AB| + |DE| = \dots$$



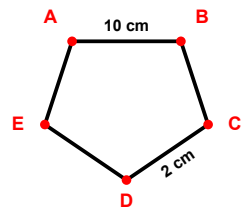
$$|AB| + |DE| = \dots$$



$$|AB| + |BC| = \dots$$

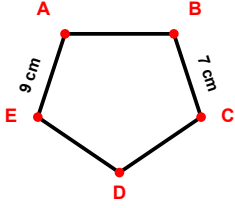


$$|DE| + |AB| = \dots$$

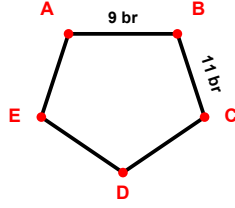


$$|AB| + |CD| = \dots$$

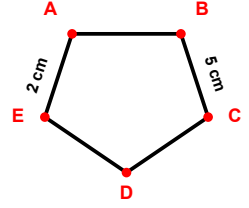
SORU: Aşağıdaki şekillerde verilen kenar uzunluklarının toplamını bulunuz.



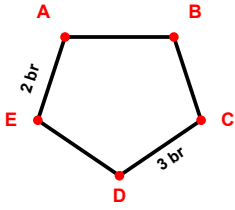
$$|BC| + |EA| = \dots$$



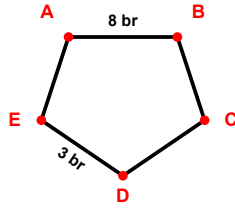
$$|AB| + |BC| = \dots$$



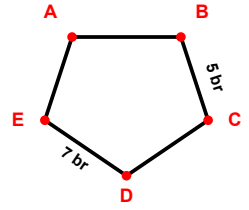
$$|EA| + |BC| = \dots$$



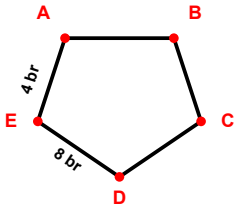
$$|EA| + |CD| = \dots$$



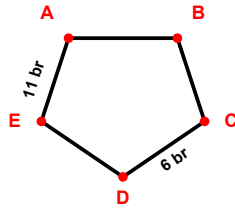
$$|AB| + |DE| = \dots$$



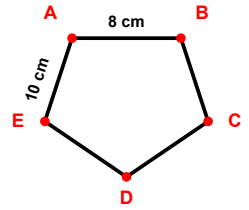
$$|DE| + |BC| = \dots$$



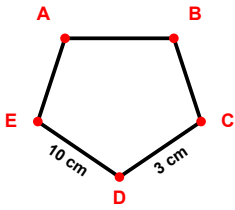
$$|EA| + |DE| = \dots$$



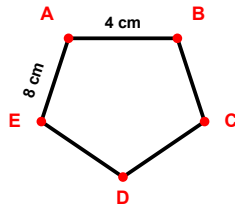
$$|EA| + |CD| = \dots$$



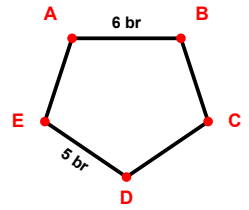
$$|AB| + |EA| = \dots$$



$$|CD| + |DE| = \dots$$

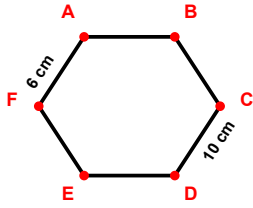


$$|EA| + |AB| = \dots$$

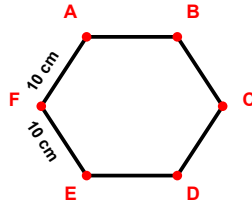


$$|AB| + |DE| = \dots$$

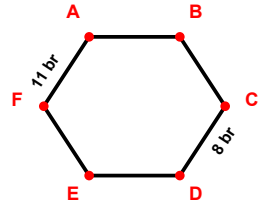
SORU: Aşağıdaki şekillerde verilen kenar uzunluklarının toplamını bulunuz.



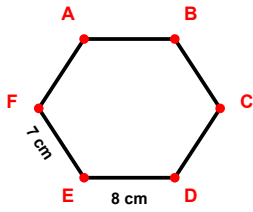
$$|CD| + |FA| = \dots$$



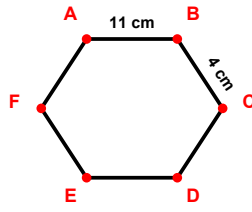
$$|FA| + |FE| = \dots$$



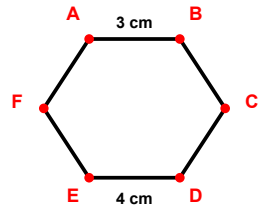
$$|CD| + |FA| = \dots$$



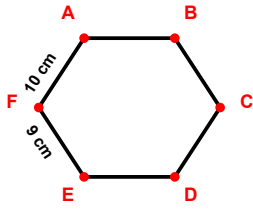
$$|FE| + |DE| = \dots$$



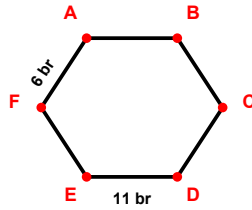
$$|BC| + |AB| = \dots$$



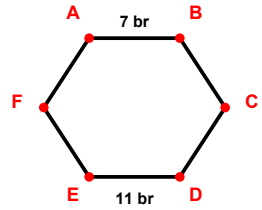
$$|AB| + |DE| = \dots$$



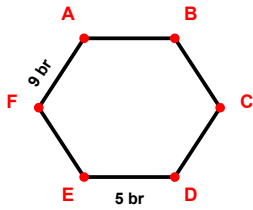
$$|FE| + |FA| = \dots$$



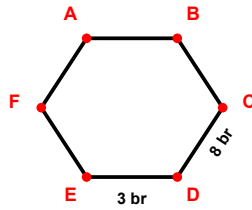
$$|DE| + |FA| = \dots$$



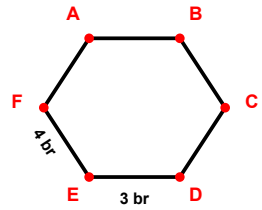
$$|AB| + |DE| = \dots$$



$$|DE| + |FA| = \dots$$

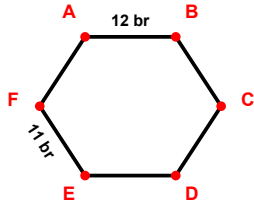


$$|DE| + |CD| = \dots$$

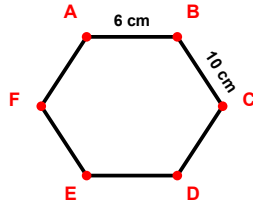


$$|FE| + |DE| = \dots$$

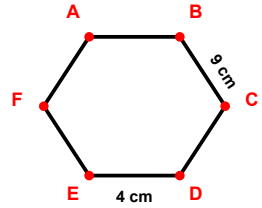
SORU: Aşağıdaki şekillerde verilen kenar uzunluklarının toplamını bulunuz.



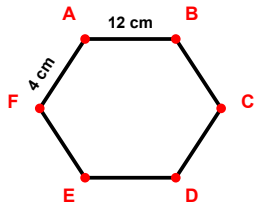
$$|EF| + |AB| = \dots$$



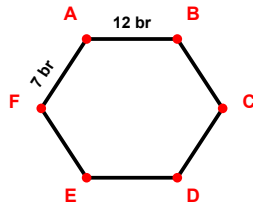
$$|BC| + |AB| = \dots$$



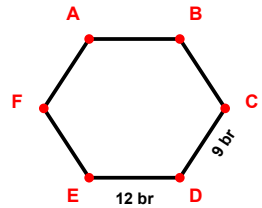
$$|DE| + |BC| = \dots$$



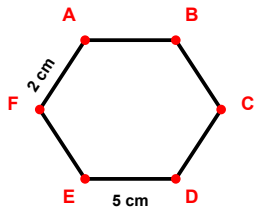
$$|FA| + |AB| = \dots$$



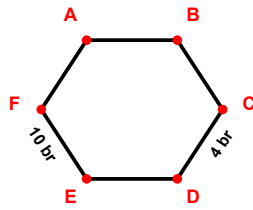
$$|FA| + |AB| = \dots$$



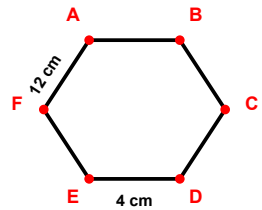
$$|CD| + |DE| = \dots$$



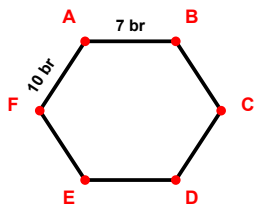
$$|FA| + |DE| = \dots$$



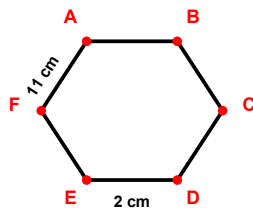
$$|CD| + |EF| = \dots$$



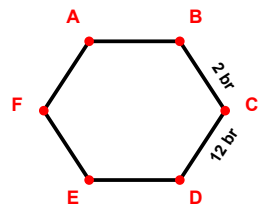
$$|DE| + |FA| = \dots$$



$$|AB| + |FA| = \dots$$

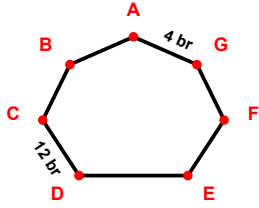


$$|FA| + |DE| = \dots$$

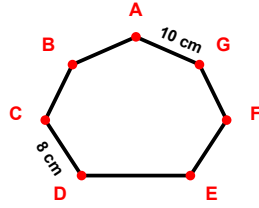


$$|CD| + |BC| = \dots$$

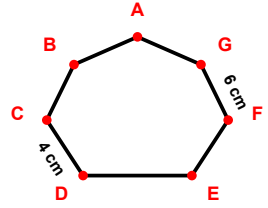
SORU: Aşağıdaki şekillerde verilen kenar uzunluklarının toplamını bulunuz.



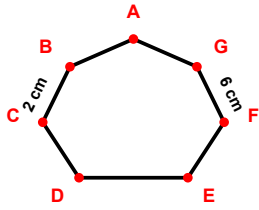
$$|CD| + |GA| = \dots$$



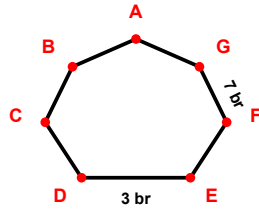
$$|CD| + |GA| = \dots$$



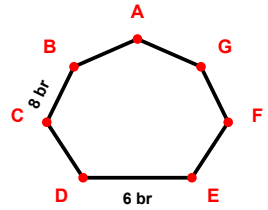
$$|CD| + |FG| = \dots$$



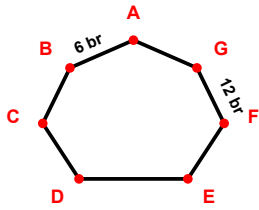
$$|FG| + |BC| = \dots$$



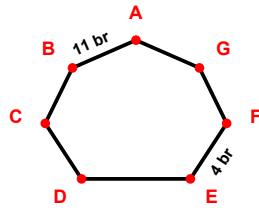
$$|DE| + |FG| = \dots$$



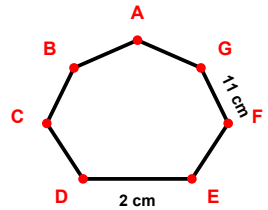
$$|DE| + |BC| = \dots$$



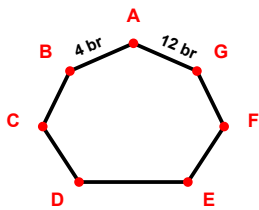
$$|AB| + |FG| = \dots$$



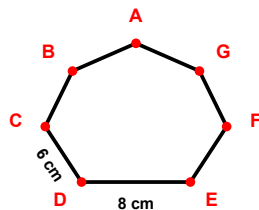
$$|EF| + |AB| = \dots$$



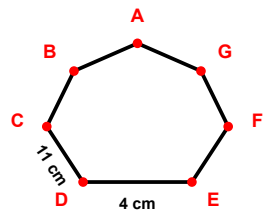
$$|DE| + |FG| = \dots$$



$$|AB| + |GA| = \dots$$

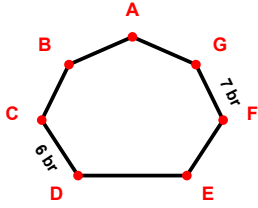


$$|CD| + |DE| = \dots$$

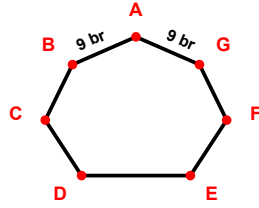


$$|DE| + |CD| = \dots$$

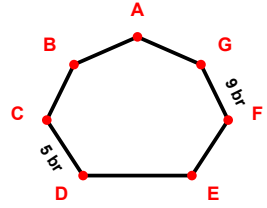
SORU: Aşağıdaki şekillerde verilen kenar uzunluklarının toplamını bulunuz.



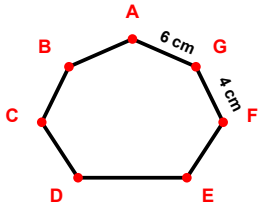
$$|FG| + |CD| = \dots$$



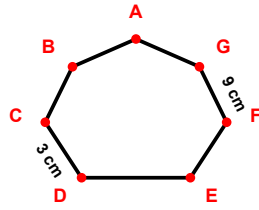
$$|AB| + |GA| = \dots$$



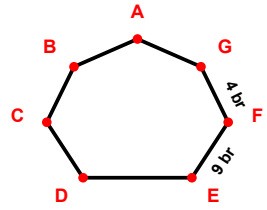
$$|FG| + |CD| = \dots$$



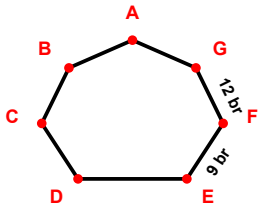
$$|GA| + |FG| = \dots$$



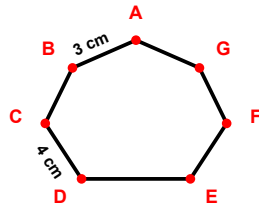
$$|FG| + |CD| = \dots$$



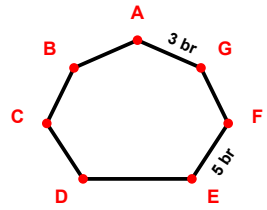
$$|FG| + |EF| = \dots$$



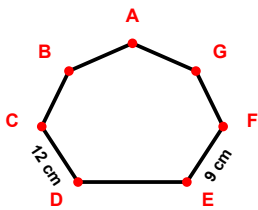
$$|FG| + |EF| = \dots$$



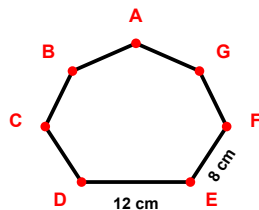
$$|CD| + |AB| = \dots$$



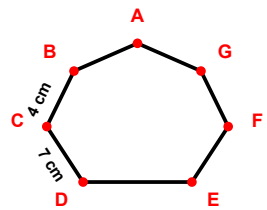
$$|GA| + |EF| = \dots$$



$$|EF| + |CD| = \dots$$

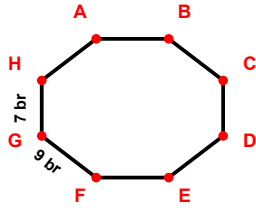


$$|EF| + |DE| = \dots$$

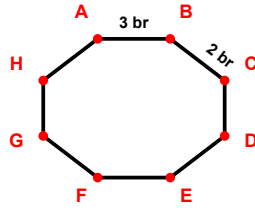


$$|BC| + |CD| = \dots$$

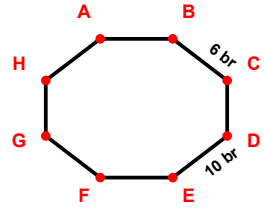
SORU: Aşağıdaki şekillerde verilen kenar uzunluklarının toplamını bulunuz.



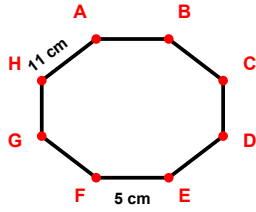
$$|GH| + |FG| = \dots$$



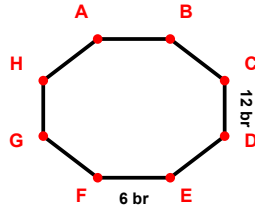
$$|BC| + |AB| = \dots$$



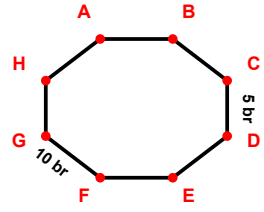
$$|DE| + |BC| = \dots$$



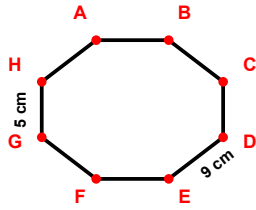
$$|HA| + |EF| = \dots$$



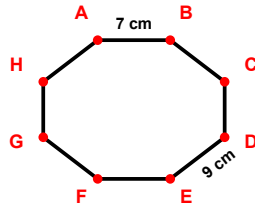
$$|CD| + |EF| = \dots$$



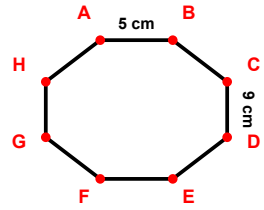
$$|CD| + |FG| = \dots$$



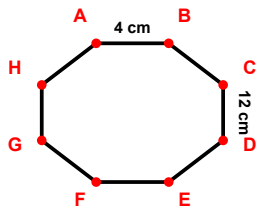
$$|GH| + |DE| = \dots$$



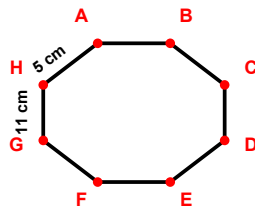
$$|DE| + |AB| = \dots$$



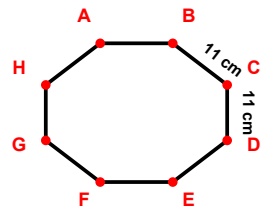
$$|AB| + |CD| = \dots$$



$$|CD| + |AB| = \dots$$

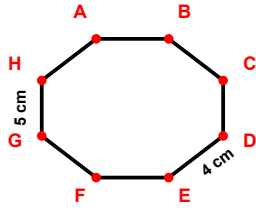


$$|HA| + |GH| = \dots$$

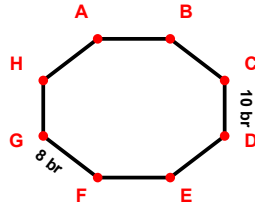


$$|CD| + |BC| = \dots$$

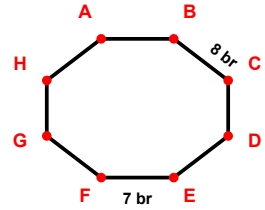
SORU: Aşağıdaki şekillerde verilen kenar uzunluklarının toplamını bulunuz.



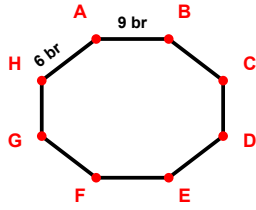
$$|GH| + |DE| = \dots$$



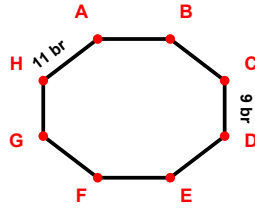
$$|CD| + |FG| = \dots$$



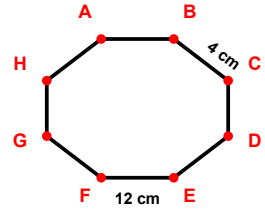
$$|EF| + |BC| = \dots$$



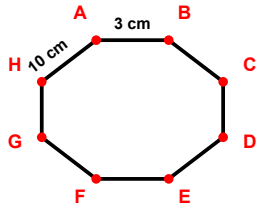
$$|HA| + |AB| = \dots$$



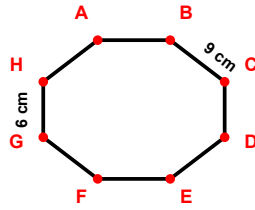
$$|HA| + |CD| = \dots$$



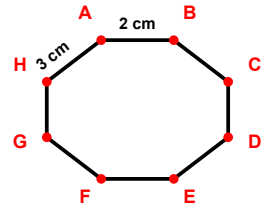
$$|EF| + |BC| = \dots$$



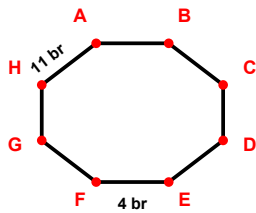
$$|HA| + |AB| = \dots$$



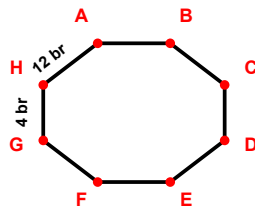
$$|GH| + |BC| = \dots$$



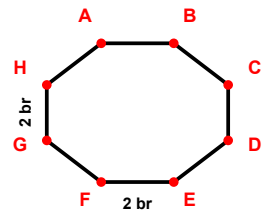
$$|AB| + |HA| = \dots$$



$$|EF| + |HA| = \dots$$

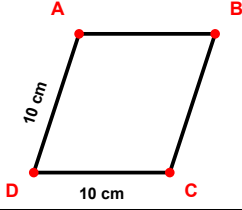


$$|HA| + |GH| = \dots$$

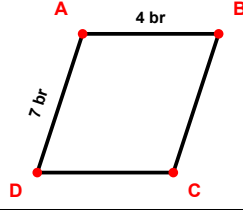


$$|GH| + |EF| = \dots$$

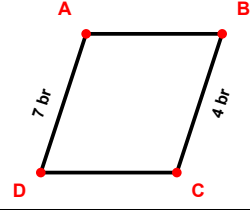
SORU: Aşağıdaki şekillerde verilen kenar uzunluklarının toplamını bulunuz.



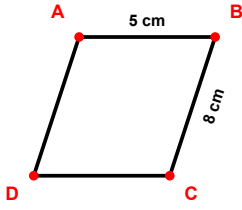
$$|CD| + |DA| = \dots$$



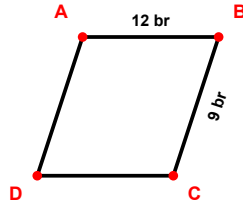
$$|DA| + |AB| = \dots$$



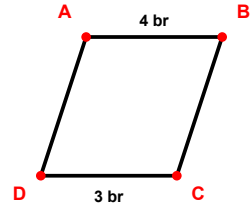
$$|DA| + |BC| = \dots$$



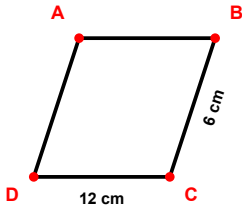
$$|BC| + |AB| = \dots$$



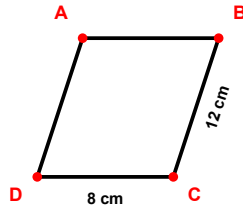
$$|AB| + |BC| = \dots$$



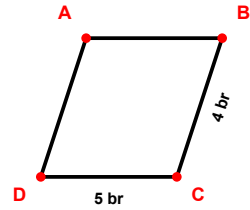
$$|CD| + |AB| = \dots$$



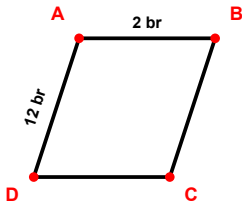
$$|CD| + |BC| = \dots$$



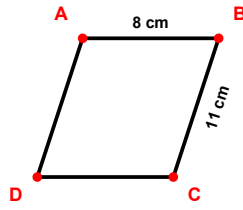
$$|CD| + |BC| = \dots$$



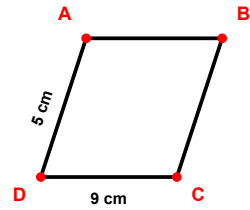
$$|BC| + |CD| = \dots$$



$$|AB| + |DA| = \dots$$

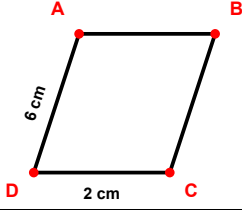


$$|AB| + |BC| = \dots$$

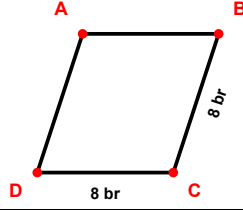


$$|CD| + |DA| = \dots$$

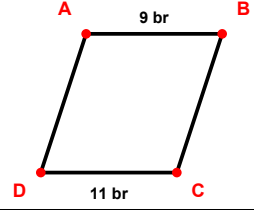
SORU: Aşağıdaki şekillerde verilen kenar uzunluklarının toplamını bulunuz.



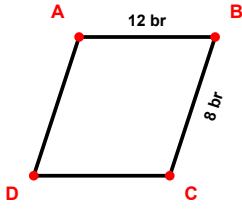
$$|CD| + |DA| = \dots$$



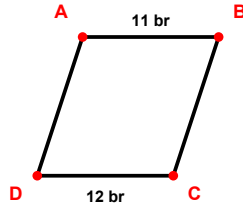
$$|BC| + |CD| = \dots$$



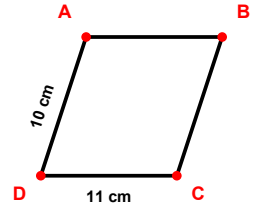
$$|AB| + |CD| = \dots$$



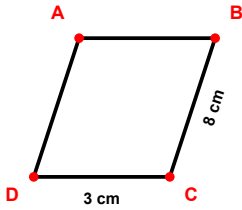
$$|BC| + |AB| = \dots$$



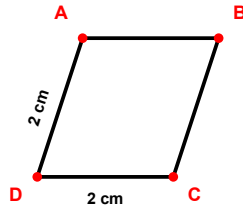
$$|AB| + |CD| = \dots$$



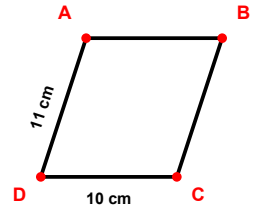
$$|DA| + |CD| = \dots$$



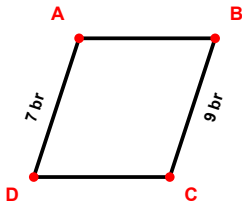
$$|CD| + |BC| = \dots$$



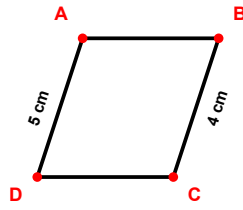
$$|DA| + |CD| = \dots$$



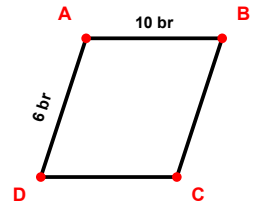
$$|CD| + |DA| = \dots$$



$$|BC| + |DA| = \dots$$

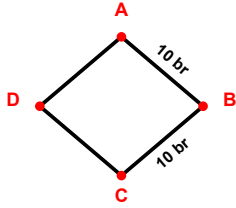


$$|DA| + |BC| = \dots$$

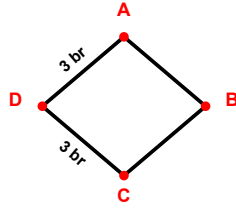


$$|AB| + |DA| = \dots$$

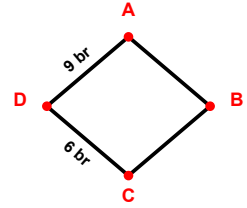
SORU: Aşağıdaki şekillerde verilen kenar uzunluklarının toplamını bulunuz.



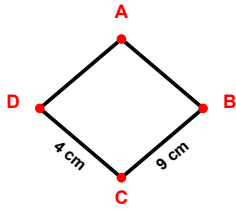
$$|BC| + |AB| = \dots$$



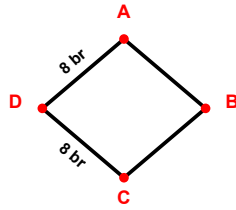
$$|DA| + |CD| = \dots$$



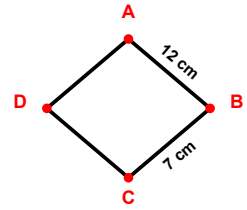
$$|DA| + |CD| = \dots$$



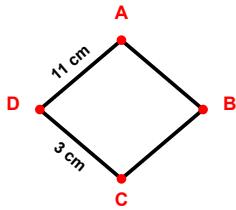
$$|CD| + |BC| = \dots$$



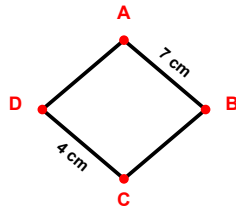
$$|DA| + |CD| = \dots$$



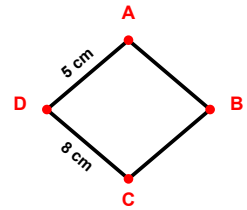
$$|AB| + |BC| = \dots$$



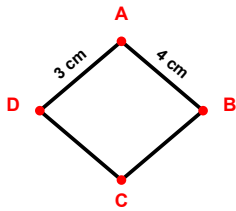
$$|CD| + |DA| = \dots$$



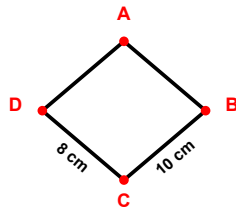
$$|CD| + |AB| = \dots$$



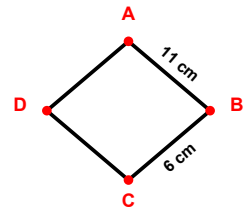
$$|CD| + |DA| = \dots$$



$$|DA| + |AB| = \dots$$

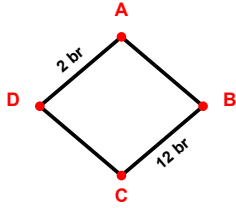


$$|BC| + |CD| = \dots$$

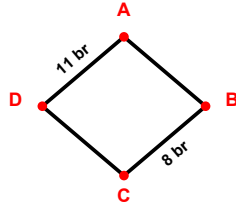


$$|AB| + |BC| = \dots$$

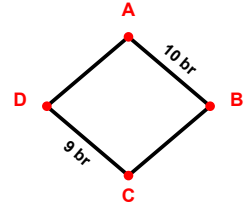
SORU: Aşağıdaki şekillerde verilen kenar uzunluklarının toplamını bulunuz.



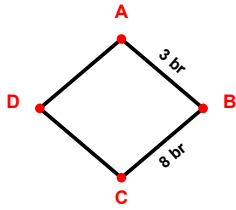
$$|DA| + |BC| = \dots$$



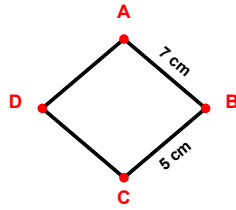
$$|BC| + |DA| = \dots$$



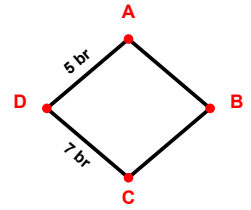
$$|CD| + |AB| = \dots$$



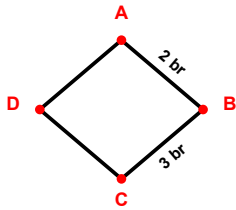
$$|AB| + |BC| = \dots$$



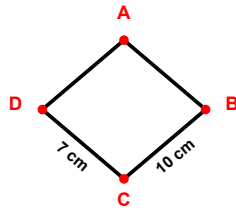
$$|BC| + |AB| = \dots$$



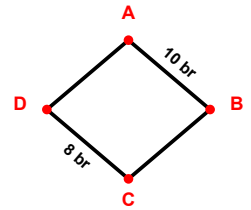
$$|CD| + |DA| = \dots$$



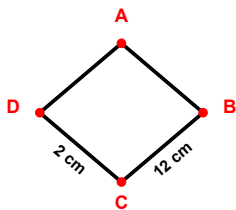
$$|AB| + |BC| = \dots$$



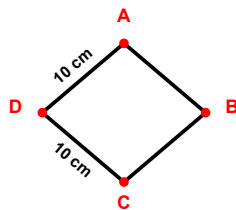
$$|BC| + |CD| = \dots$$



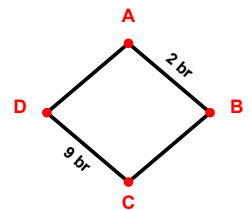
$$|CD| + |AB| = \dots$$



$$|CD| + |BC| = \dots$$

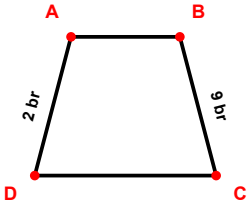


$$|CD| + |DA| = \dots$$

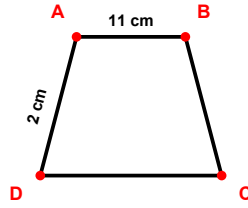


$$|AB| + |CD| = \dots$$

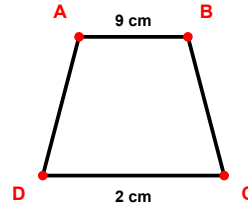
SORU: Aşağıdaki şekillerde verilen kenar uzunluklarının toplamını bulunuz.



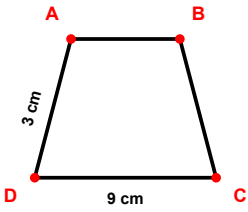
$$|DA| + |BC| = \dots$$



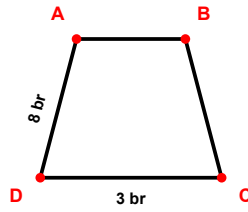
$$|DA| + |AB| = \dots$$



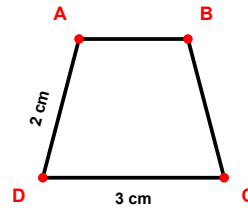
$$|AB| + |CD| = \dots$$



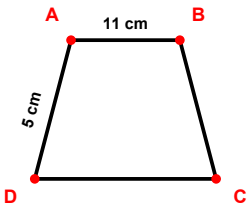
$$|CD| + |DA| = \dots$$



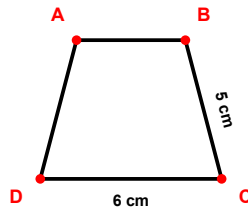
$$|CD| + |DA| = \dots$$



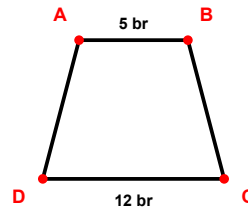
$$|CD| + |DA| = \dots$$



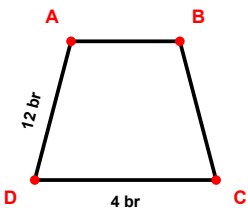
$$|AB| + |DA| = \dots$$



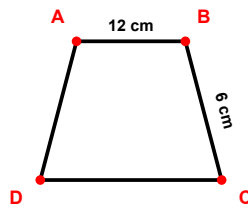
$$|CD| + |BC| = \dots$$



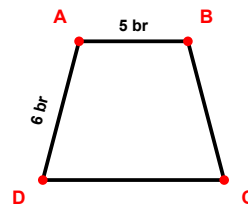
$$|AB| + |CD| = \dots$$



$$|DA| + |CD| = \dots$$

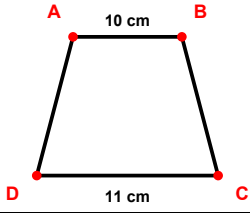


$$|BC| + |AB| = \dots$$

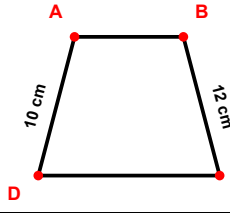


$$|DA| + |AB| = \dots$$

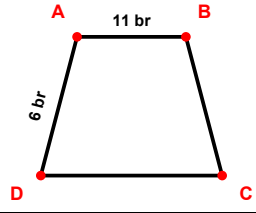
SORU: Aşağıdaki şekillerde verilen kenar uzunluklarının toplamını bulunuz.



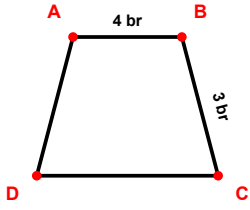
$$|AB| + |CD| = \dots$$



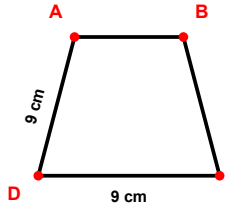
$$|BC| + |DA| = \dots$$



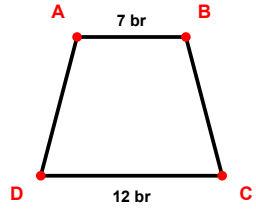
$$|AB| + |DA| = \dots$$



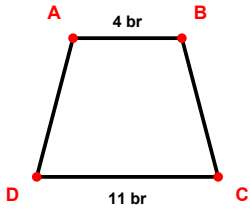
$$|AB| + |BC| = \dots$$



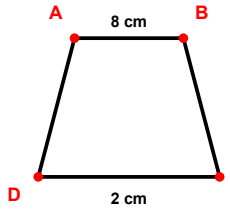
$$|CD| + |DA| = \dots$$



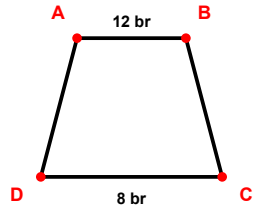
$$|AB| + |CD| = \dots$$



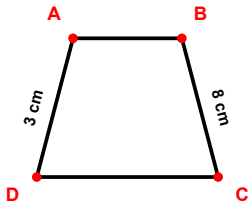
$$|CD| + |AB| = \dots$$



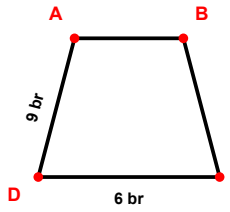
$$|CD| + |AB| = \dots$$



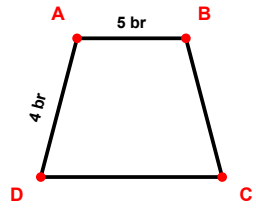
$$|AB| + |CD| = \dots$$



$$|BC| + |DA| = \dots$$

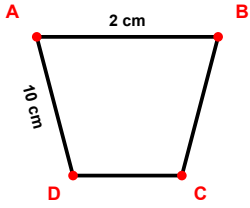


$$|CD| + |DA| = \dots$$

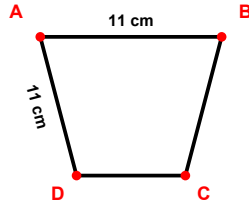


$$|AB| + |DA| = \dots$$

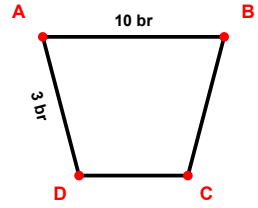
SORU: Aşağıdaki şekillerde verilen kenar uzunluklarının toplamını bulunuz.



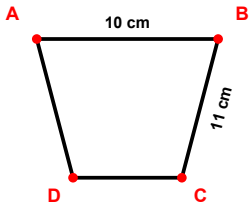
$$|DA| + |AB| = \dots$$



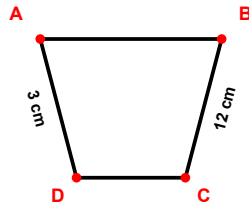
$$|AB| + |DA| = \dots$$



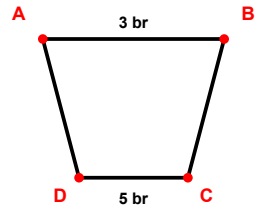
$$|DA| + |AB| = \dots$$



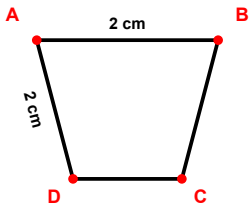
$$|AB| + |BC| = \dots$$



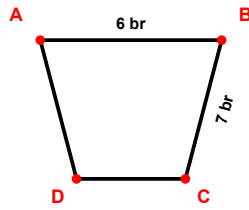
$$|BC| + |DA| = \dots$$



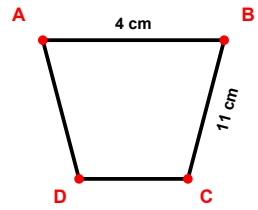
$$|CD| + |AB| = \dots$$



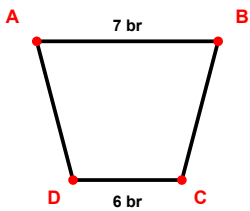
$$|DA| + |AB| = \dots$$



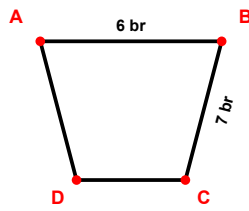
$$|BC| + |AB| = \dots$$



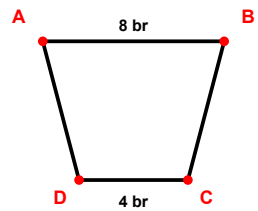
$$|AB| + |BC| = \dots$$



$$|AB| + |CD| = \dots$$

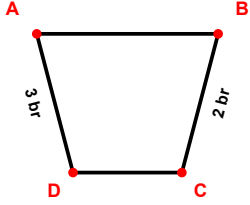


$$|AB| + |BC| = \dots$$

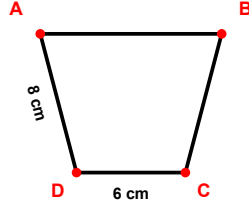


$$|CD| + |AB| = \dots$$

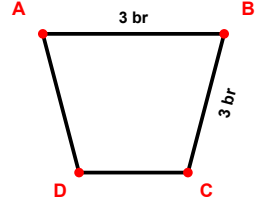
SORU: Aşağıdaki şekillerde verilen kenar uzunluklarının toplamını bulunuz.



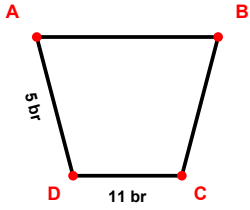
$$|BC| + |DA| = \dots$$



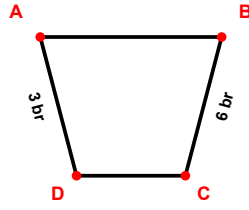
$$|CD| + |DA| = \dots$$



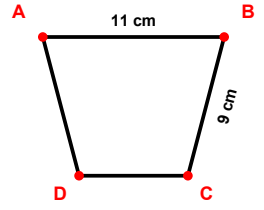
$$|BC| + |AB| = \dots$$



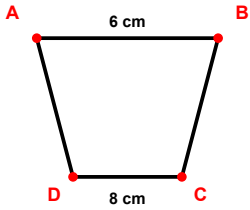
$$|DA| + |CD| = \dots$$



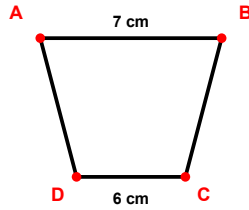
$$|DA| + |BC| = \dots$$



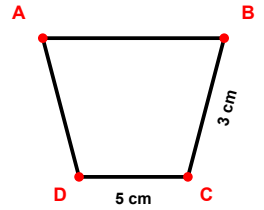
$$|AB| + |BC| = \dots$$



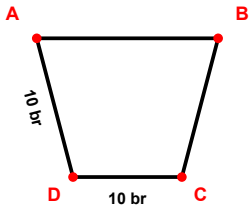
$$|AB| + |CD| = \dots$$



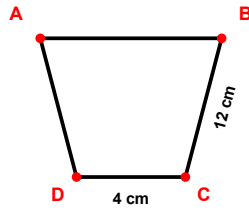
$$|CD| + |AB| = \dots$$



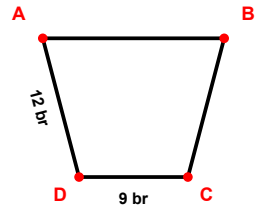
$$|CD| + |BC| = \dots$$



$$|DA| + |CD| = \dots$$



$$|CD| + |BC| = \dots$$



$$|DA| + |CD| = \dots$$

SÜREÇ ODAKLI DEĞERLENDİRME ÖLÇEĞİ

| Geliştirilmeli (0-109) | İyi (110-187) | Çok İyi (188-265) | Mükemmel (266-312) |
|--------------------------|--------------------------|--------------------------|--------------------------|
| <input type="checkbox"/> | <input type="checkbox"/> | <input type="checkbox"/> | <input type="checkbox"/> |

Hazırlayan:

Bu bölüme sınıfınızın ilgili kazanıma yönelik genel durumuna ilişkin gözlem ve izlenimlerinizi, öğrencilerinizin bu kazanımla ilgili öğrenme eksikliklerini ve bu eksikliklerin giderilmesi amacıyla yaptığınız/yapmayı planladığınız faaliyetleri not edebilirsiniz.

| No | Adı - Soyadı | Toplam Puan | Değerlendirme |
|----|--------------|-------------|---------------|
| 1 | | | |
| 2 | | | |
| 3 | | | |
| 4 | | | |
| 5 | | | |
| 6 | | | |
| 7 | | | |
| 8 | | | |
| 9 | | | |
| 10 | | | |
| 11 | | | |
| 12 | | | |
| 13 | | | |
| 14 | | | |
| 15 | | | |
| 16 | | | |
| 17 | | | |
| 18 | | | |
| 19 | | | |
| 20 | | | |
| 21 | | | |
| 22 | | | |
| 23 | | | |
| 24 | | | |
| 25 | | | |
| 26 | | | |
| 27 | | | |
| 28 | | | |
| 29 | | | |
| 30 | | | |
| 31 | | | |
| 32 | | | |
| 33 | | | |
| 34 | | | |
| 35 | | | |

Hazırlayan: